


Name _____


Microscope Practice

Choose from the prepared slides at your table. Observe the slide under different powers of magnification. Reminder: each lens is labeled. Draw a **detailed** picture of what you see. Label it.


No. 1 Power _____




No. 2 Power _____




No. 3 Power _____




No. 4 Power _____




No. 5 Power _____




No. 6 Power _____



No. 7 Power _____



No. 8 Power _____



No. 9 Power _____

